



HOW THE BOOK IS SET OUT

- There are eighteen different topics.

- Each one is dealt with in a separate unit.

- Each unit has two sections:-
 1. The INTRODUCTION with a worked Example and Step by Step instructions.
 2. The EXERCISE with some Hints for extra help.

- A detachable answers sheet is provided at the back.

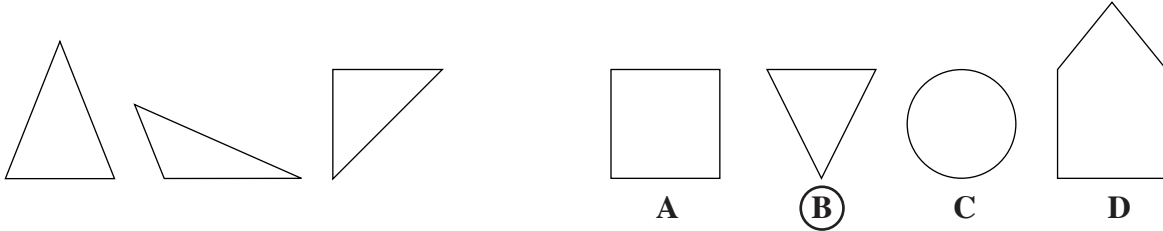


HOW TO USE THIS BOOK

1. Do the units in order, as they are graded.
2. Read the INTRODUCTION 2 or 3 times to understand the example.
3. Do the EXERCISE on your own.
4. Use the STEP by STEP section and the Hints provided.
5. If you change an answer, make sure the change is clear.
6. Each exercise should take between 5 and 10 minutes.
7. Do not rush!
8. When you have finished each unit, mark it with an adult.
9. Enter your score out of 10 at the end of each exercise.
10. Fill in your score on the bar chart on page 44.

UNIT 2 WHICH SHAPE IS SIMILAR?

Which shape is similar to the group of three on the left? Circle one letter. Look at this example.



The answer is **B** because:-
Like the three shapes on the left, B is a triangle.

Not A, a square.
Not C, a circle.
Not D, a pentagon.

STEP BY STEP

THINGS TO LOOK FOR:-

- THE TYPES, COLOURS AND/OR NUMBER OF SHAPES
- THE POSITION OF THE SHAPES AND/OR THE SYMBOLS

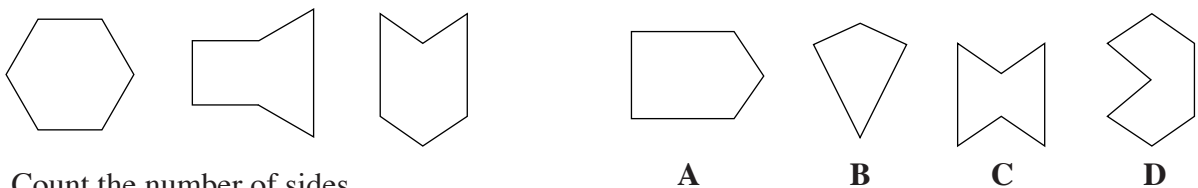
STEP 1:- Find what makes each group of three similar.

STEP 2:- Ignore any answers that are obviously wrong.

STEP 3:- Make sure your chosen answer matches the group of three in **every way**.

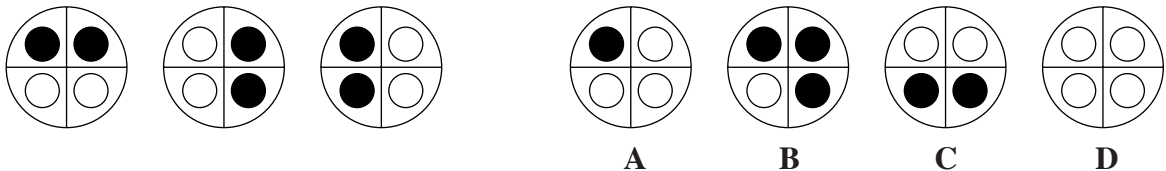
Which shape is similar to the group of three on the left? Circle one letter each time.
If necessary use the HINTS.

1



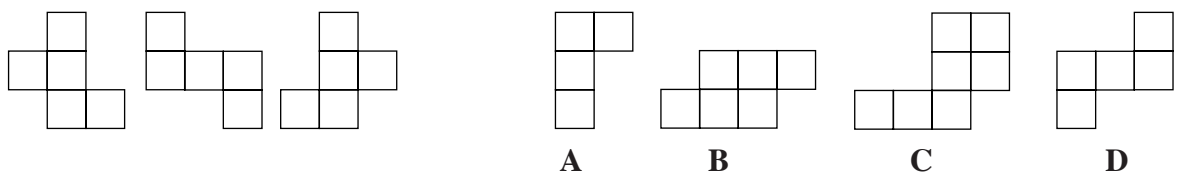
Count the number of sides.

2



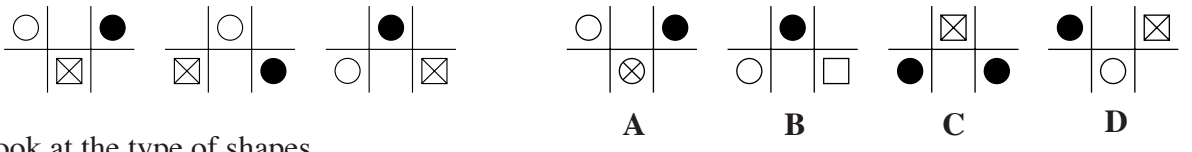
Look at the colours of the small circles.

3



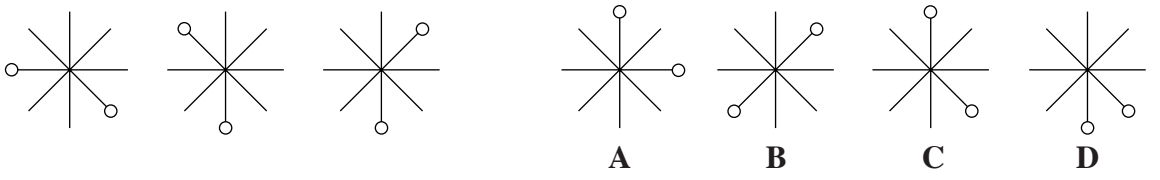
Count the number of squares.

4



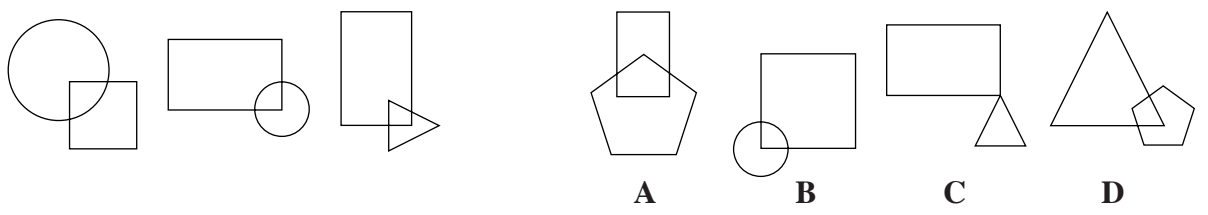
Look at the type of shapes.

5



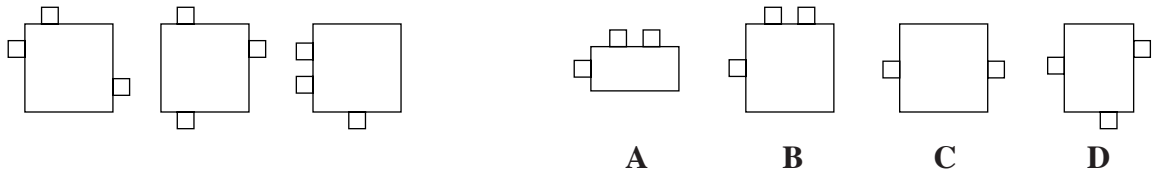
Count the number of lines between the circles.

6



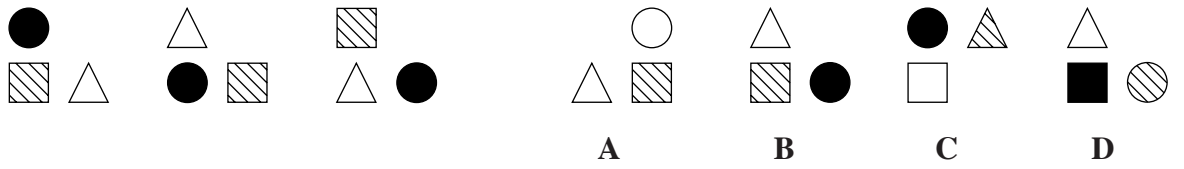
Look at the position of the two shapes.

7



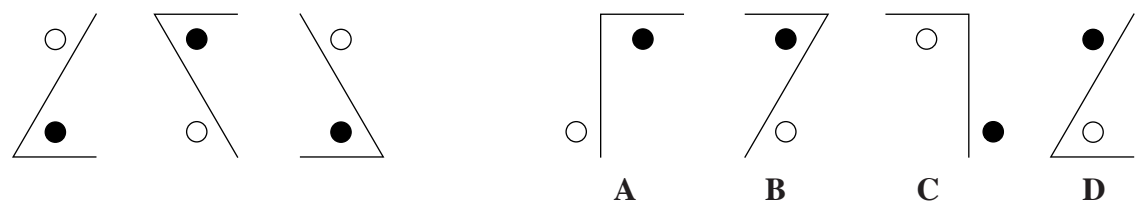
Count all the squares in each diagram.

8



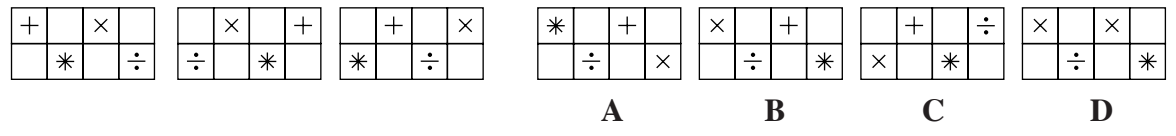
Look at the colours of the three shapes.

9



Look at the type of angle and the position of the circles.

10



Look at the position and the types of symbols.

Score 10

HOW WELL DID YOU DO?

STEP BY STEP



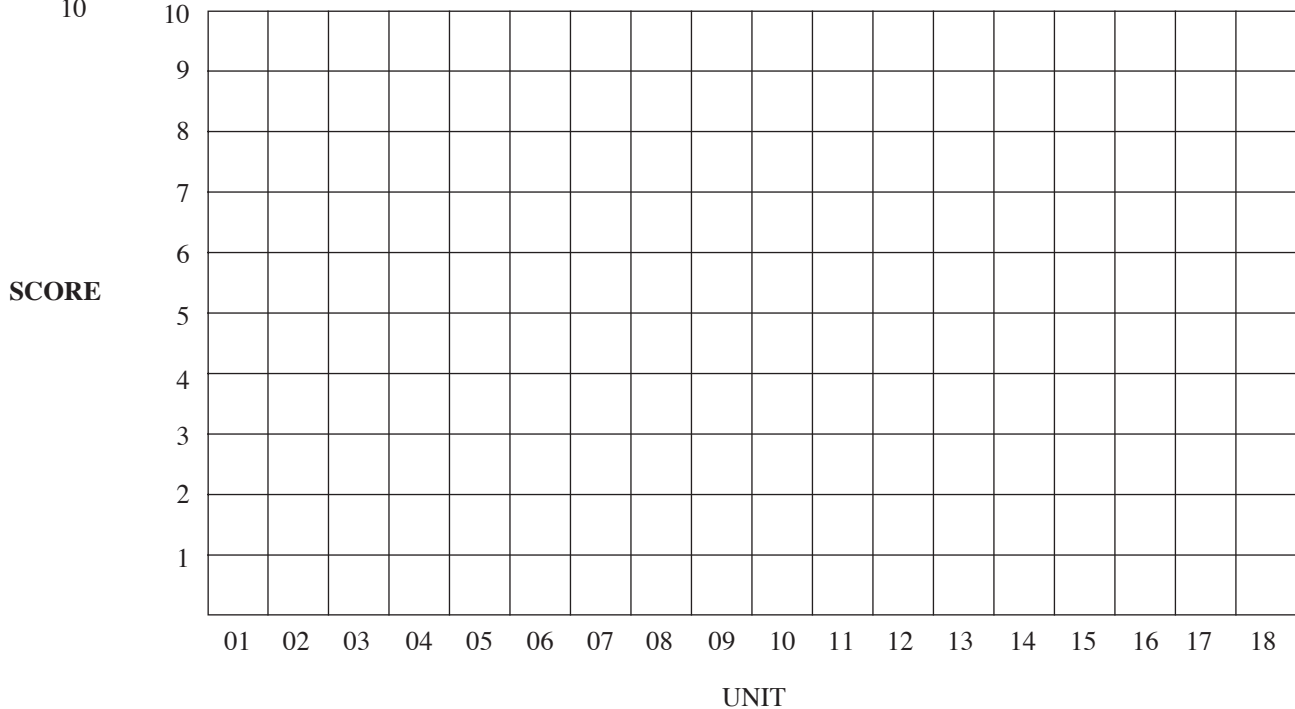
Score $\frac{7}{10}$

STEP 1:- Look at the example for a score of $\frac{7}{10}$.

STEP 2:- Now shade in the bar chart below with your score for each unit.

STEP 3:- Enter at the bottom of the page how often you got each score.

STEP 4:- Enter your most common score in the box.



I scored	$\frac{0}{10}$	$\frac{1}{10}$	$\frac{2}{10}$	$\frac{3}{10}$	$\frac{4}{10}$	$\frac{5}{10}$	$\frac{6}{10}$	$\frac{7}{10}$	$\frac{8}{10}$	$\frac{9}{10}$	$\frac{10}{10}$	Total
How often?												18

$\frac{\quad}{10}$
MY MOST COMMON SCORE

Now you have finished this book, you are ready to start Test 01 in
LEARNING TOGETHER's Practice Tests in Non Verbal Reasoning Book One.

LEARNING TOGETHER

18 Shandon Park
BELFAST
BT5 6NW
Phone Fax 028 90402086



www.learningtogether.co.uk

e-mail:- info@learningtogether.co.uk

ORDER FORM

Your address:-

PLEASE COMPLETE PAYMENT DETAILS
Cheque No _____ is enclosed.
Order No _____
Please Invoice _____

NO. OF COPIES	TITLE	ISBN	RRP	TOTAL COST
	How to do Non Verbal Reasoning - Step by Step	ISBN 1873385 24 2	£5.99	
	Preparation for 11+ and 12+ Tests- Non Verbal Reasoning Book 1	ISBN 1873385 22 6	£5.99	
	Preparation for 11+ and 12+ Tests- Non Verbal Reasoning Book 2	ISBN 1873385 23 4	£5.99	
	Preparation for 11+ and 12+ Tests- Non Verbal Reasoning Book 1 MULTIPLE CHOICE	ISBN 1873385 30 7	£5.99	
	Preparation for 11+ and 12+ Tests- Non Verbal Reasoning Book 2 MULTIPLE CHOICE	ISBN 1873385 31 5	£5.99	
	How to do Verbal Reasoning - Step by Step	ISBN 1873385 29 3	£5.99	
	Preparation for 11+ and 12+Tests – Verbal Reasoning Book 1	ISBN 1873385 25 0	£5.99	
	Preparation for 11+ and 12+Tests – Verbal Reasoning Book 2	ISBN 1873385 26 9	£5.99	
	Preparation for 11+ and 12+Tests – Verbal Reasoning Book 3	ISBN 1873385 27 7	£5.99	
	Preparation for 11+ and 12+Tests – Verbal Reasoning Book 4	ISBN 1873385 28 5	£5.99	
	Verbal Reasoning Challenge Tests	ISBN 1873385 33 1	£5.99	
	Preparation for Common Entrance and 11+ and 12+Tests – Mathematics	ISBN 1873385 20 X	£5.99	
	Preparation for Common Entrance and 11+ and 12+Tests – English	ISBN 1873385 21 8	£5.99	
	Preparation for Common Entrance – Science	ISBN 1873385 19 6	£5.99	
			Sub Total	
			P&P	£ 4.95
Total Cost including P&P				

I enclose a cheque payable to Learning Together for total payment of £ _____

PLEASE POST YOUR PAYMENT TO
LEARNING TOGETHER, 18 SHANDON PARK, BELFAST BT5 6NW

IF YOU LIKE OUR BOOKS PLEASE TELL OTHERS – IF NOT PLEASE TELL US.