



ADVICE AND INSTRUCTIONS ON COMPLETING THIS TEST

GL Assessment Transfer Test Mathematics Practice TEST NUMBER 1

1. There are 45 questions in this test and three familiarization questions.
2. Start at question 1 and work your way to question 45.
3. Mark the letter for your answer on the answer sheet provided.
4. If you change an answer make sure the change is clear.
5. If you are unable to complete a question leave it and go to the next one.
6. Do not think about the question you have just left as this wastes time.
7. You may do any rough work on the test paper or on another piece of paper.
8. This test should take approximately 45 minutes.
9. When you have finished this test mark it with an adult.
10. An adult may be able to explain any questions you do not understand.

Whilst the content of this test is believed to be true and accurate at the time of publishing, neither the authors nor the publishers can accept any legal responsibility or liability for any errors or omissions that may have been made. If, however, you do find any errors please contact us at smcconkey@learningtogether.co.uk so that we can have them corrected.

Please visit www.learningtogether.co.uk for additional practice material.

©www.learningtogether.co.uk. For single personal use only.

Copying in any format whatsoever is strictly illegal and will be pursued in courts of law.

29. Which letter has one **horizontal** line of symmetry?

F
A

J
B

A
C

R
D

C
E

30. Which square must be shaded so that the dotted line is a line of symmetry?

				A	B
					C
				D	
				E	

31. If I multiply 2.56 by 100 what will my answer be?

A 256

B 2.56

C 25.6

D 0.256

E 0.2056

32. Look at this group of numbers:-

8

12

1

9

3

7

2

What is the average of these numbers?

A 42

B 8

C 6

D 7

E 12

33. A shop orders 15 boxes of biscuits. Each box holds 24 packets.
How many packets of biscuits does the shop order in total?

A 15

B 240

C 360

D 24

E 120

Go to the next page.

Please visit www.learningtogether.co.uk for additional practice material.

©www.learningtogether.co.uk. For single personal use only.

Copying in any format whatsoever is strictly illegal and will be pursued in courts of law.



GL Assessment Transfer Test

Mathematics Practice TEST NUMBER 1

PUPIL ANSWER SHEET

MARK YOUR ANSWERS LIKE THIS

FAMILIARISATION QUESTIONS

1	[A]	[B]	[C]	[D]	[E]		2	[A]	[B]	[C]	[D]	[E]		3	[A]	[B]	[C]	[D]	[E]
----------	-----	-----	-----	-----	-----	--	----------	-----	-----	-----	-----	-----	--	----------	-----	-----	-----	-----	-----

START HERE

1	[A]	[B]	[C]	[D]	[E]
2	[A]	[B]	[C]	[D]	[E]
3	[A]	[B]	[C]	[D]	[E]
4	[A]	[B]	[C]	[D]	[E]
5	[A]	[B]	[C]	[D]	[E]

16	[A]	[B]	[C]	[D]	[E]
17	[A]	[B]	[C]	[D]	[E]
18	[A]	[B]	[C]	[D]	[E]
19	[A]	[B]	[C]	[D]	[E]
20	[A]	[B]	[C]	[D]	[E]

31	[A]	[B]	[C]	[D]	[E]
32	[A]	[B]	[C]	[D]	[E]
33	[A]	[B]	[C]	[D]	[E]
34	[A]	[B]	[C]	[D]	[E]
35	[A]	[B]	[C]	[D]	[E]

6	[A]	[B]	[C]	[D]	[E]
7	[A]	[B]	[C]	[D]	[E]
8	[A]	[B]	[C]	[D]	[E]
9	[A]	[B]	[C]	[D]	[E]
10	[A]	[B]	[C]	[D]	[E]

21	[A]	[B]	[C]	[D]	[E]
22	[A]	[B]	[C]	[D]	[E]
23	[A]	[B]	[C]	[D]	[E]
24	[A]	[B]	[C]	[D]	[E]
25	[A]	[B]	[C]	[D]	[E]

36	[A]	[B]	[C]	[D]	[E]
37	[A]	[B]	[C]	[D]	[E]
38	[A]	[B]	[C]	[D]	[E]
39	[A]	[B]	[C]	[D]	[E]
40	[A]	[B]	[C]	[D]	[E]

11	[A]	[B]	[C]	[D]	[E]
12	[A]	[B]	[C]	[D]	[E]
13	[A]	[B]	[C]	[D]	[E]
14	[A]	[B]	[C]	[D]	[E]
15	[A]	[B]	[C]	[D]	[E]

26	[A]	[B]	[C]	[D]	[E]
27	[A]	[B]	[C]	[D]	[E]
28	[A]	[B]	[C]	[D]	[E]
29	[A]	[B]	[C]	[D]	[E]
30	[A]	[B]	[C]	[D]	[E]

41	[A]	[B]	[C]	[D]	[E]
42	[A]	[B]	[C]	[D]	[E]
43	[A]	[B]	[C]	[D]	[E]
44	[A]	[B]	[C]	[D]	[E]
45	[A]	[B]	[C]	[D]	[E]

GO TO TOP OF
NEXT COLUMN

GO TO TOP OF
NEXT COLUMN

Please visit www.learningtogether.co.uk for additional practice material.

©www.learningtogether.co.uk. For single personal use only.

Copying in any format whatsoever is strictly illegal and will be pursued in courts of law.



GL Assessment Transfer Test

Mathematics Practice TEST NUMBER 1

ANSWERS

FAMILIARISATION QUESTIONS

1	[A]	[B]	[C]	[D]	[E]
2	[A]	[B]	[C]	[D]	[E]
3	[A]	[B]	[C]	[D]	[E]

START HERE

1	[A]	[B]	[C]	[D]	[E]
2	[A]	[B]	[C]	[D]	[E]
3	[A]	[B]	[C]	[D]	[E]
4	[A]	[B]	[C]	[D]	[E]
5	[A]	[B]	[C]	[D]	[E]

16	[A]	[B]	[C]	[D]	[E]
17	[A]	[B]	[C]	[D]	[E]
18	[A]	[B]	[C]	[D]	[E]
19	[A]	[B]	[C]	[D]	[E]
20	[A]	[B]	[C]	[D]	[E]

31	[A]	[B]	[C]	[D]	[E]
32	[A]	[B]	[C]	[D]	[E]
33	[A]	[B]	[C]	[D]	[E]
34	[A]	[B]	[C]	[D]	[E]
35	[A]	[B]	[C]	[D]	[E]

6	[A]	[B]	[C]	[D]	[E]
7	[A]	[B]	[C]	[D]	[E]
8	[A]	[B]	[C]	[D]	[E]
9	[A]	[B]	[C]	[D]	[E]
10	[A]	[B]	[C]	[D]	[E]

21	[A]	[B]	[C]	[D]	[E]
22	[A]	[B]	[C]	[D]	[E]
23	[A]	[B]	[C]	[D]	[E]
24	[A]	[B]	[C]	[D]	[E]
25	[A]	[B]	[C]	[D]	[E]

36	[A]	[B]	[C]	[D]	[E]
37	[A]	[B]	[C]	[D]	[E]
38	[A]	[B]	[C]	[D]	[E]
39	[A]	[B]	[C]	[D]	[E]
40	[A]	[B]	[C]	[D]	[E]

11	[A]	[B]	[C]	[D]	[E]
12	[A]	[B]	[C]	[D]	[E]
13	[A]	[B]	[C]	[D]	[E]
14	[A]	[B]	[C]	[D]	[E]
15	[A]	[B]	[C]	[D]	[E]

26	[A]	[B]	[C]	[D]	[E]
27	[A]	[B]	[C]	[D]	[E]
28	[A]	[B]	[C]	[D]	[E]
29	[A]	[B]	[C]	[D]	[E]
30	[A]	[B]	[C]	[D]	[E]

41	[A]	[B]	[C]	[D]	[E]
42	[A]	[B]	[C]	[D]	[E]
43	[A]	[B]	[C]	[D]	[E]
44	[A]	[B]	[C]	[D]	[E]
45	[A]	[B]	[C]	[D]	[E]

GO TO TOP OF
NEXT COLUMN

GO TO TOP OF
NEXT COLUMN

FAMILIARISATION QUESTIONS

Mark the letter for your answer on the answer sheet provided.

1.

Calculate 5% of 100

A 60

B 5

C 20

D 110

E 40

2.

What is 18 minus 12?

A 20

B 4

C 30

D 8

E 6

3.

What is $\frac{2}{5}$ of 10?

A 4

B 20

C 5

D 3

E 1

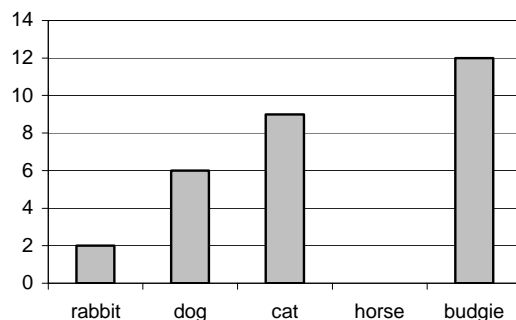
Please visit www.learningtogether.co.uk for additional practice material.

©www.learningtogether.co.uk. For single personal use only.

Copying in any format whatsoever is strictly illegal and will be pursued in courts of law.

8.

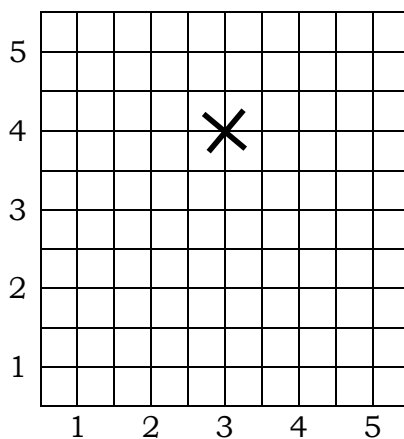
This bar chart shows the number and type of pets owned by a school class of 30 children. The pets are rabbits, dogs, cats, horses and budgies. Each child owns only one pet. All 5 animals are kept as pets. **NOT** all information is shown on the graph.



Which statement **must** be true?

- A 14 pupils own a budgie
- B No one owns a horse
- C There are a total of 10 animals when you add the rabbits and dogs together
- D More pupils own rabbits than own cats
- E One pupil owns a horse

9.



What are the coordinates of the cross?

- A (4, 5)
- B (5, 4)
- C (4, 4)
- D (3, 4)
- E (4, 3)

10.

In which answer below does the 3 stand for 30?

- A 301.05
- B 13.28
- C 3156.09
- D 135.6
- E 17.30

11.

How should 2.30am be written on a 24-hour clock?

- A 12.30
- B 20.30
- C 02.30
- D 14.30
- E 18.30

12.

Paul is facing North and turns clockwise to face North West?
How many degrees does he turn through?

- A 90°
- B 180°
- C 270°
- D 315°
- E 45°

Go to the next page.

Please visit www.learningtogether.co.uk for additional practice material.

©www.learningtogether.co.uk. For single personal use only.

Copying in any format whatsoever is strictly illegal and will be pursued in courts of law.



GL Assessment Transfer Test

Mathematics Practice TEST NUMBER 2

PUPIL ANSWER SHEET

MARK YOUR ANSWERS LIKE THIS 

FAMILIARISATION QUESTIONS

1	[A]	[B]	[C]	[D]	[E]		2	[A]	[B]	[C]	[D]	[E]		3	[A]	[B]	[C]	[D]	[E]
----------	-----	-----	-----	-----	-----	--	----------	-----	-----	-----	-----	-----	--	----------	-----	-----	-----	-----	-----

START HERE

1	[A]	[B]	[C]	[D]	[E]
2	[A]	[B]	[C]	[D]	[E]
3	[A]	[B]	[C]	[D]	[E]
4	[A]	[B]	[C]	[D]	[E]
5	[A]	[B]	[C]	[D]	[E]

16	[A]	[B]	[C]	[D]	[E]
17	[A]	[B]	[C]	[D]	[E]
18	[A]	[B]	[C]	[D]	[E]
19	[A]	[B]	[C]	[D]	[E]
20	[A]	[B]	[C]	[D]	[E]

31	[A]	[B]	[C]	[D]	[E]
32	[A]	[B]	[C]	[D]	[E]
33	[A]	[B]	[C]	[D]	[E]
34	[A]	[B]	[C]	[D]	[E]
35	[A]	[B]	[C]	[D]	[E]

6	[A]	[B]	[C]	[D]	[E]
7	[A]	[B]	[C]	[D]	[E]
8	[A]	[B]	[C]	[D]	[E]
9	[A]	[B]	[C]	[D]	[E]
10	[A]	[B]	[C]	[D]	[E]

21	[A]	[B]	[C]	[D]	[E]
22	[A]	[B]	[C]	[D]	[E]
23	[A]	[B]	[C]	[D]	[E]
24	[A]	[B]	[C]	[D]	[E]
25	[A]	[B]	[C]	[D]	[E]

36	[A]	[B]	[C]	[D]	[E]
37	[A]	[B]	[C]	[D]	[E]
38	[A]	[B]	[C]	[D]	[E]
39	[A]	[B]	[C]	[D]	[E]
40	[A]	[B]	[C]	[D]	[E]

11	[A]	[B]	[C]	[D]	[E]
12	[A]	[B]	[C]	[D]	[E]
13	[A]	[B]	[C]	[D]	[E]
14	[A]	[B]	[C]	[D]	[E]
15	[A]	[B]	[C]	[D]	[E]

26	[A]	[B]	[C]	[D]	[E]
27	[A]	[B]	[C]	[D]	[E]
28	[A]	[B]	[C]	[D]	[E]
29	[A]	[B]	[C]	[D]	[E]
30	[A]	[B]	[C]	[D]	[E]

41	[A]	[B]	[C]	[D]	[E]
42	[A]	[B]	[C]	[D]	[E]
43	[A]	[B]	[C]	[D]	[E]
44	[A]	[B]	[C]	[D]	[E]
45	[A]	[B]	[C]	[D]	[E]

GO TO TOP OF
NEXT COLUMN

GO TO TOP OF
NEXT COLUMN

Please visit www.learningtogether.co.uk for additional practice material.

©www.learningtogether.co.uk. For single personal use only.

Copying in any format whatsoever is strictly illegal and will be pursued in courts of law.



GL Assessment Transfer Test

Mathematics Practice TEST NUMBER 2

ANSWERS

FAMILIARISATION QUESTIONS

1	[A]	[B]	[C]	[D]	[E]
2	[A]	[B]	[C]	[D]	[E]
3	[A]	[B]	[C]	[D]	[E]

START HERE

1	[A]	[B]	[C]	[D]	[E]
2	[A]	[B]	[C]	[D]	[E]
3	[A]	[B]	[C]	[D]	[E]
4	[A]	[B]	[C]	[D]	[E]
5	[A]	[B]	[C]	[D]	[E]

16	[A]	[B]	[C]	[D]	[E]
17	[A]	[B]	[C]	[D]	[E]
18	[A]	[B]	[C]	[D]	[E]
19	[A]	[B]	[C]	[D]	[E]
20	[A]	[B]	[C]	[D]	[E]

31	[A]	[B]	[C]	[D]	[E]
32	[A]	[B]	[C]	[D]	[E]
33	[A]	[B]	[C]	[D]	[E]
34	[A]	[B]	[C]	[D]	[E]
35	[A]	[B]	[C]	[D]	[E]

6	[A]	[B]	[C]	[D]	[E]
7	[A]	[B]	[C]	[D]	[E]
8	[A]	[B]	[C]	[D]	[E]
9	[A]	[B]	[C]	[D]	[E]
10	[A]	[B]	[C]	[D]	[E]

21	[A]	[B]	[C]	[D]	[E]
22	[A]	[B]	[C]	[D]	[E]
23	[A]	[B]	[C]	[D]	[E]
24	[A]	[B]	[C]	[D]	[E]
25	[A]	[B]	[C]	[D]	[E]

36	[A]	[B]	[C]	[D]	[E]
37	[A]	[B]	[C]	[D]	[E]
38	[A]	[B]	[C]	[D]	[E]
39	[A]	[B]	[C]	[D]	[E]
40	[A]	[B]	[C]	[D]	[E]

11	[A]	[B]	[C]	[D]	[E]
12	[A]	[B]	[C]	[D]	[E]
13	[A]	[B]	[C]	[D]	[E]
14	[A]	[B]	[C]	[D]	[E]
15	[A]	[B]	[C]	[D]	[E]

26	[A]	[B]	[C]	[D]	[E]
27	[A]	[B]	[C]	[D]	[E]
28	[A]	[B]	[C]	[D]	[E]
29	[A]	[B]	[C]	[D]	[E]
30	[A]	[B]	[C]	[D]	[E]


41	[A]	[B]	[C]	[D]	[E]
42	[A]	[B]	[C]	[D]	[E]
43	[A]	[B]	[C]	[D]	[E]
44	[A]	[B]	[C]	[D]	[E]
45	[A]	[B]	[C]	[D]	[E]

GO TO TOP OF
NEXT COLUMN

GO TO TOP OF
NEXT COLUMN

8. A man buys concrete at £40.50 a lorry load.
How many lorry loads can he buy for £810.00?
- A 2 B 45 C 80 D 16 E 20

9. Which shape does not have a **horizontal** line of symmetry?



10. $1.25 + \square = 4.5 - 2.25$
- Which number goes into the box to complete the equation accurately?
- A 6.75 B 1.25 C 4.50 D 3.50 E 1.00

11. A ship left Dover at 15.50 and arrived at Calais at 18.05.
How long did the journey take?
- A 2.5hrs B 3.5hrs C 3.25hrs D 1.5hrs E 2.25hrs

12. What is the missing number in this grid?

9	12	15
15	18	21
18	21	?

- A 18 B 21 C 12 D 24 E 36

Go to the next page.

Please visit www.learningtogether.co.uk for additional practice material.

©www.learningtogether.co.uk. For single personal use only.

Copying in any format whatsoever is strictly illegal and will be pursued in courts of law.



GL Assessment Transfer Test

Mathematics Practice TEST NUMBER 3

PUPIL ANSWER SHEET

MARK YOUR ANSWERS LIKE THIS 

FAMILIARISATION QUESTIONS

1	[A]	[B]	[C]	[D]	[E]		2	[A]	[B]	[C]	[D]	[E]		3	[A]	[B]	[C]	[D]	[E]
----------	-----	-----	-----	-----	-----	--	----------	-----	-----	-----	-----	-----	--	----------	-----	-----	-----	-----	-----

START HERE

1	[A]	[B]	[C]	[D]	[E]
2	[A]	[B]	[C]	[D]	[E]
3	[A]	[B]	[C]	[D]	[E]
4	[A]	[B]	[C]	[D]	[E]
5	[A]	[B]	[C]	[D]	[E]

16	[A]	[B]	[C]	[D]	[E]
17	[A]	[B]	[C]	[D]	[E]
18	[A]	[B]	[C]	[D]	[E]
19	[A]	[B]	[C]	[D]	[E]
20	[A]	[B]	[C]	[D]	[E]

31	[A]	[B]	[C]	[D]	[E]
32	[A]	[B]	[C]	[D]	[E]
33	[A]	[B]	[C]	[D]	[E]
34	[A]	[B]	[C]	[D]	[E]
35	[A]	[B]	[C]	[D]	[E]

6	[A]	[B]	[C]	[D]	[E]
7	[A]	[B]	[C]	[D]	[E]
8	[A]	[B]	[C]	[D]	[E]
9	[A]	[B]	[C]	[D]	[E]
10	[A]	[B]	[C]	[D]	[E]

21	[A]	[B]	[C]	[D]	[E]
22	[A]	[B]	[C]	[D]	[E]
23	[A]	[B]	[C]	[D]	[E]
24	[A]	[B]	[C]	[D]	[E]
25	[A]	[B]	[C]	[D]	[E]

36	[A]	[B]	[C]	[D]	[E]
37	[A]	[B]	[C]	[D]	[E]
38	[A]	[B]	[C]	[D]	[E]
39	[A]	[B]	[C]	[D]	[E]
40	[A]	[B]	[C]	[D]	[E]

11	[A]	[B]	[C]	[D]	[E]
12	[A]	[B]	[C]	[D]	[E]
13	[A]	[B]	[C]	[D]	[E]
14	[A]	[B]	[C]	[D]	[E]
15	[A]	[B]	[C]	[D]	[E]

26	[A]	[B]	[C]	[D]	[E]
27	[A]	[B]	[C]	[D]	[E]
28	[A]	[B]	[C]	[D]	[E]
29	[A]	[B]	[C]	[D]	[E]
30	[A]	[B]	[C]	[D]	[E]

41	[A]	[B]	[C]	[D]	[E]
42	[A]	[B]	[C]	[D]	[E]
43	[A]	[B]	[C]	[D]	[E]
44	[A]	[B]	[C]	[D]	[E]
45	[A]	[B]	[C]	[D]	[E]

GO TO TOP OF
NEXT COLUMN

GO TO TOP OF
NEXT COLUMN



GL Assessment Transfer Test

Mathematics Practice TEST NUMBER 3

ANSWERS

FAMILIARISATION QUESTIONS

1	[A]	[B]	[C]	[D]	[E]
2	[A]	[B]	[C]	[D]	[E]
3	[A]	[B]	[C]	[D]	[E]

START HERE

1	[A]	[B]	[C]	[D]	[E]
2	[A]	[B]	[C]	[D]	[E]
3	[A]	[B]	[C]	[D]	[E]
4	[A]	[B]	[C]	[D]	[E]
5	[A]	[B]	[C]	[D]	[E]

16	[A]	[B]	[C]	[D]	[E]
17	[A]	[B]	[C]	[D]	[E]
18	[A]	[B]	[C]	[D]	[E]
19	[A]	[B]	[C]	[D]	[E]
20	[A]	[B]	[C]	[D]	[E]

31	[A]	[B]	[C]	[D]	[E]
32	[A]	[B]	[C]	[D]	[E]
33	[A]	[B]	[C]	[D]	[E]
34	[A]	[B]	[C]	[D]	[E]
35	[A]	[B]	[C]	[D]	[E]

6	[A]	[B]	[C]	[D]	[E]
7	[A]	[B]	[C]	[D]	[E]
8	[A]	[B]	[C]	[D]	[E]
9	[A]	[B]	[C]	[D]	[E]
10	[A]	[B]	[C]	[D]	[E]

21	[A]	[B]	[C]	[D]	[E]
22	[A]	[B]	[C]	[D]	[E]
23	[A]	[B]	[C]	[D]	[E]
24	[A]	[B]	[C]	[D]	[E]
25	[A]	[B]	[C]	[D]	[E]

36	[A]	[B]	[C]	[D]	[E]
37	[A]	[B]	[C]	[D]	[E]
38	[A]	[B]	[C]	[D]	[E]
39	[A]	[B]	[C]	[D]	[E]
40	[A]	[B]	[C]	[D]	[E]

11	[A]	[B]	[C]	[D]	[E]
12	[A]	[B]	[C]	[D]	[E]
13	[A]	[B]	[C]	[D]	[E]
14	[A]	[B]	[C]	[D]	[E]
15	[A]	[B]	[C]	[D]	[E]

26	[A]	[B]	[C]	[D]	[E]
27	[A]	[B]	[C]	[D]	[E]
28	[A]	[B]	[C]	[D]	[E]
29	[A]	[B]	[C]	[D]	[E]
30	[A]	[B]	[C]	[D]	[E]

41	[A]	[B]	[C]	[D]	[E]
42	[A]	[B]	[C]	[D]	[E]
43	[A]	[B]	[C]	[D]	[E]
44	[A]	[B]	[C]	[D]	[E]
45	[A]	[B]	[C]	[D]	[E]

GO TO TOP OF
NEXT COLUMN

GO TO TOP OF
NEXT COLUMN